




Name: _____ Grade: _____


Date: _____ Score: _____


INSTRUCTIONS


On the line next to each object, write its length in CENTIMETERS using the MAGIC METER in each question to guide you.

Lets Measure With Metric Units!

a)  Toy Train _____ cm



b)  Pencil _____ cm



c)  Candy _____ cm



d)  Needle _____ cm



e)  Postage Stamp _____ cm

